

Quizizz

6th Grade Unit 2 Map Test Study Guide (2nd Hour)

Name : _____
Class : _____
Date : _____

1. What letter depicts Hudson Bay?



- a) G
- b) H
- c) A
- d) E

2. What river is letter D?



- a) Mackenzie River
- b) Ohio River
- c) St. Lawrence River
- d) Frazer River

3. What province is letter H?



a) British Columbia

b) Alberta

c) Quebec

d) Ontario

4. What mountains are letter F?



a) Appalachian Mountains

b) Rocky Mountains

c) Sierra Madre Mountains

d) Coast Mountains

5. What province is British Columbia?



a) D

b) E

c) C

d) A

6. What river is letter G?



Mexico, Central America, & the Caribbean Islands
Bodies of Water

- | | |
|--|---|
| <input type="checkbox"/> a) Missouri River | <input type="checkbox"/> b) Panama Canal |
| <input type="checkbox"/> c) Rio Grande | <input type="checkbox"/> d) Mississippi River |

7. What letter is the Panama Canal?



Mexico, Central America, & the Caribbean Islands
Bodies of Water

- | | |
|-------------------------------|-------------------------------|
| <input type="checkbox"/> a) G | <input type="checkbox"/> b) E |
| <input type="checkbox"/> c) F | <input type="checkbox"/> d) H |

8. What is letter A?



Mexico, Central America, & the Caribbean Islands
Capitals and Physical Landscapes

- | | |
|---|--|
| <input type="checkbox"/> a) Tropic of Capricorn | <input type="checkbox"/> b) Equator |
| <input type="checkbox"/> c) Prime Meridian | <input type="checkbox"/> d) Tropic of Cancer |

9. What city is letter F?



Mexico, Central America, & the Caribbean Islands
Capitals and Physical Landscapes

- | | |
|---|------------------------------------|
| <input type="checkbox"/> a) Mexico City | <input type="checkbox"/> b) Nassau |
| <input type="checkbox"/> c) Panama City | <input type="checkbox"/> d) Havana |

10. What country is Puerto Rico?



Mexico, Central America, & the Caribbean Islands Countries

a) E

b) D

c) C

d) G

11. What country is letter A?



Mexico, Central America, & the Caribbean Islands Countries

a) Haiti

b) Bahamas

c) Mexico

d) Cuba

12. What region is letter A?



Mexico, Central America, & the Caribbean Islands Regions

a) Caribbean Islands

b) Latin America

c) Central America

d) Mexico

13. What city is letter A?



- a) Detroit
- b) Chicago
- c) New Orleans
- d) Grand Rapids

14. What letter is Washington, D.C.?



- a) D
- b) G
- c) C
- d) F

15. What is letter I?



- a) Great Bear Lake
- b) Great Slave Lake
- c) Great Salt Lake
- d) Lake Nicaragua

16. What is letter C?



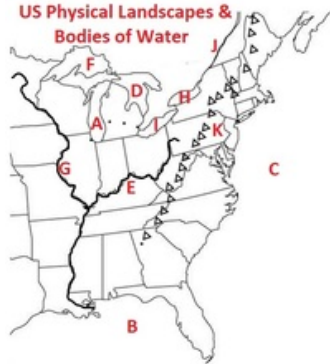
a) Gulf of Mexico

b) Gulf of California

c) Hudson Bay

d) Caribbean Sea

17. What mountain range is letter K?



a) Rocky Mountains

b) Coast Mountains

c) Sierra Nevada Mountains

d) Appalachian Mountains

18. What letter is the Mississippi River?



a) E

b) J

c) G

d) F

19. What letter is the state of Indiana?



a) J

b) E

c) A

d) G

20. What is letter A?



a) Michigan

b) Wisconsin

c) Illinois

d) Ohio

21. What letter is the state of Louisiana?



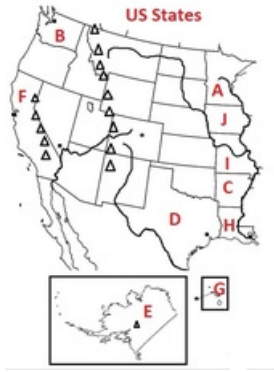
a) I

b) H

c) C

d) A

22. What letter is the state of Washington?



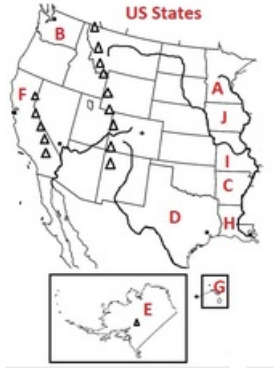
a) F

b) A

c) B

d) E

23. What state is letter A?



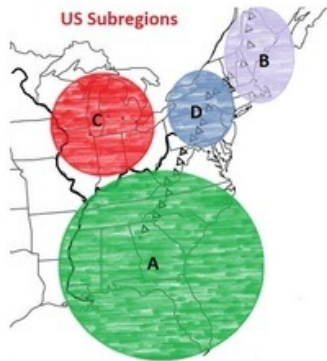
a) Minnesota

b) Iowa

c) Missouri

d) Arkansas

24. What is the subregion of letter C?



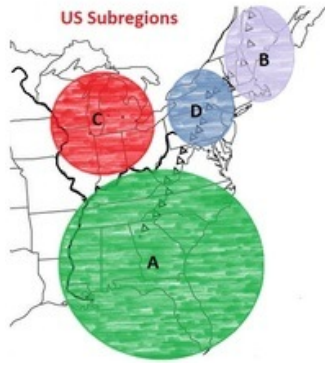
a) Midwest

b) Southeast

c) Mid-Atlantic

d) New England

25. What is the subregion of letter B?



a) Midwest

b) Southeast

c) Mid-Atlantic

d) New England

Answer Key

- | | | | |
|------|-------|-------|-------|
| 1. a | 8. d | 15. c | 22. c |
| 2. c | 9. a | 16. a | 23. a |
| 3. d | 10. d | 17. d | 24. a |
| 4. b | 11. c | 18. c | 25. d |
| 5. a | 12. a | 19. a | |
| 6. c | 13. b | 20. b | |
| 7. d | 14. c | 21. b | |